

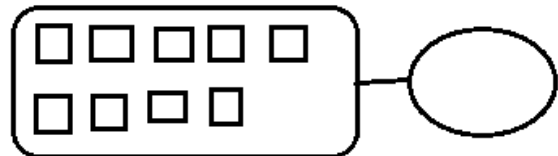

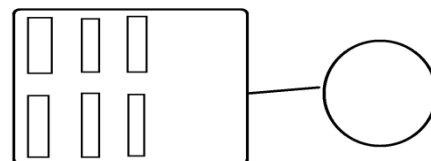


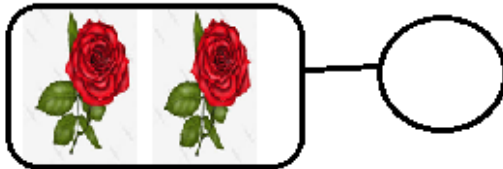
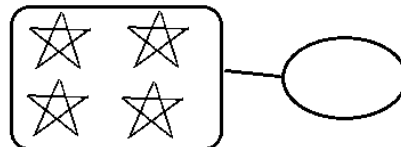

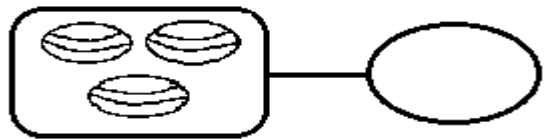


CAHIER D'ITEMS D'ÉVALUATION HEBDOMADAIRE

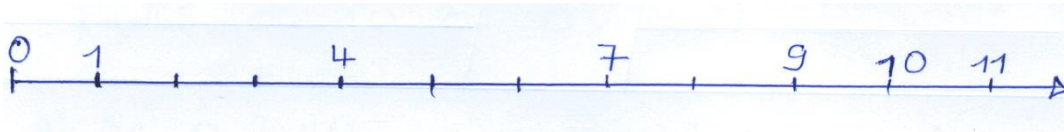
PERIODE DU 21 AU 28 Janvier 2021  
CLASSE : 1<sup>ère</sup> primaire  
NOM : .....  
POST-NOM : .....  
DATE DE REMISE: Jeudi, 28/01/2021

MATHEMATIQUE

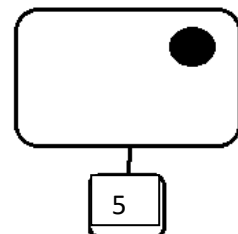
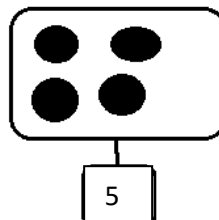
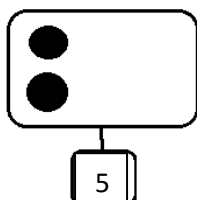
1. Je compte les objets de chaque collection puis j'écris le chiffre qui convient.

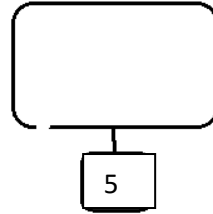
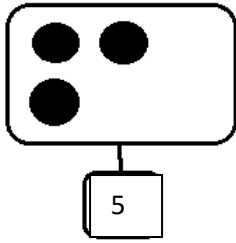


2. Je complète les chiffres qui manquent sur cette droite orientée.




3. J'ajoute les images pour avoir 5






4. Barre 3 bananes, tu restes avec combien de bananes ?



5. Barre 5 ballons, tu restes avec combien de ballons ?



6. J'écris correctement les nombres de 0 à 10, puis de 10 à 0.

a. 0 à 10

--	--	--	--	--	--	--	--	--	--	--	--

b. 10 à 0

--	--	--	--	--	--	--	--	--	--	--	--

7. Complète avec les signes de comparaison.

<, >, =

